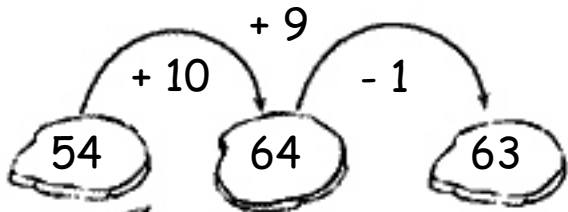
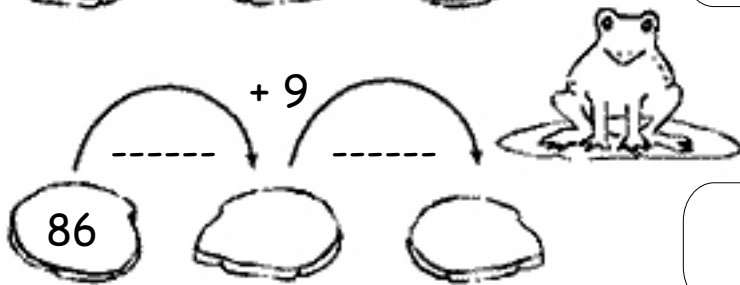
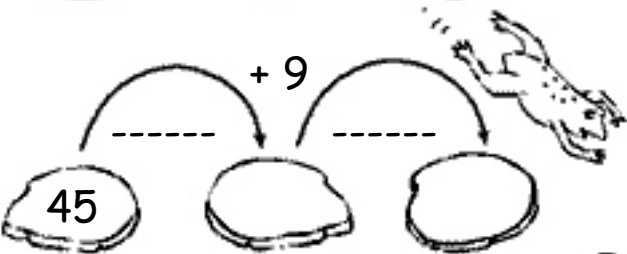
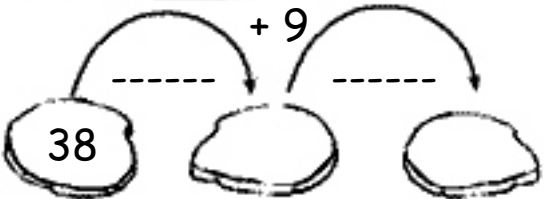
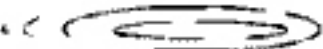
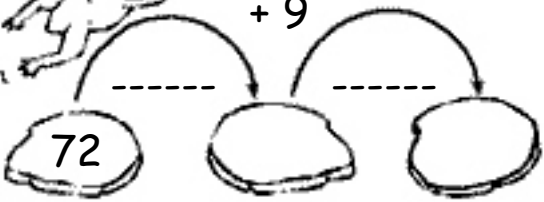


CALCOLA CON LE RANE + 9

+ 10 - 1

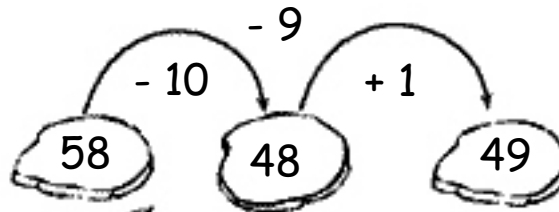


$54 + 9 = 63$

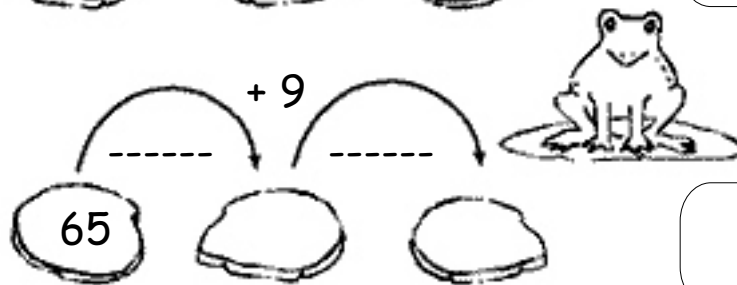
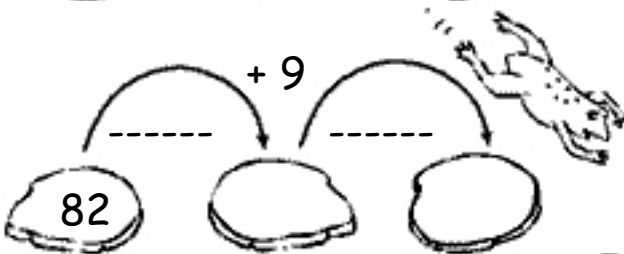
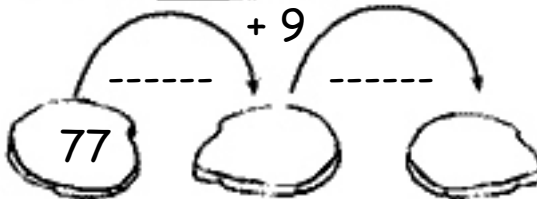

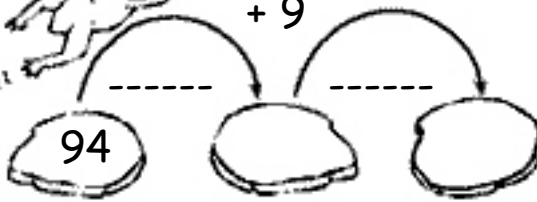


CALCOLA CON LE RANE - 9

- 10 + 1



$58 - 9 = 49$



CALCOLA USANDO LE STRATEGIE CHE HAI IMPARATO

$73 + 9 = \underline{\hspace{2cm}}$

$12 + 9 = \underline{\hspace{2cm}}$

$81 + 9 = \underline{\hspace{2cm}}$

$78 + 9 = \underline{\hspace{2cm}}$

$29 + 9 = \underline{\hspace{2cm}}$

$35 + 9 = \underline{\hspace{2cm}}$

$52 + 9 = \underline{\hspace{2cm}}$

$88 + 9 = \underline{\hspace{2cm}}$

$63 + 9 = \underline{\hspace{2cm}}$

$49 + 9 = \underline{\hspace{2cm}}$


$36 + 9 = \underline{\hspace{2cm}}$

$61 + 9 = \underline{\hspace{2cm}}$

$57 + 9 = \underline{\hspace{2cm}}$

$15 + 9 = \underline{\hspace{2cm}}$

$44 + 9 = \underline{\hspace{2cm}}$



$53 - 9 = \underline{\hspace{2cm}}$

$79 - 9 = \underline{\hspace{2cm}}$

$51 - 9 = \underline{\hspace{2cm}}$

$39 - 9 = \underline{\hspace{2cm}}$

$85 - 9 = \underline{\hspace{2cm}}$

$16 - 9 = \underline{\hspace{2cm}}$

$27 - 9 = \underline{\hspace{2cm}}$

$48 - 9 = \underline{\hspace{2cm}}$

$19 - 9 = \underline{\hspace{2cm}}$

$62 - 9 = \underline{\hspace{2cm}}$

$97 - 9 = \underline{\hspace{2cm}}$

$75 - 9 = \underline{\hspace{2cm}}$

$64 - 9 = \underline{\hspace{2cm}}$

$43 - 9 = \underline{\hspace{2cm}}$

$83 - 9 = \underline{\hspace{2cm}}$

