

LE QUATTRO OPERAZIONI ENTRO IL 200



Metti in colonna e calcola:

1

$$\begin{array}{l} 64 + 57 = \underline{\hspace{2cm}} \\ 35 + 78 = \underline{\hspace{2cm}} \\ 15 + 116 = \underline{\hspace{2cm}} \\ 47 + 93 = \underline{\hspace{2cm}} \\ 36 + 108 = \underline{\hspace{2cm}} \\ 49 + 72 = \underline{\hspace{2cm}} \\ 14 + 125 = \underline{\hspace{2cm}} \\ 52 + 59 = \underline{\hspace{2cm}} \\ 29 + 120 = \underline{\hspace{2cm}} \\ 3 + 137 = \underline{\hspace{2cm}} \end{array}$$

2

$$\begin{array}{l} 128 - 45 = \underline{\hspace{2cm}} \\ 135 - 55 = \underline{\hspace{2cm}} \\ 119 - 99 = \underline{\hspace{2cm}} \\ 136 - 85 = \underline{\hspace{2cm}} \\ 146 - 87 = \underline{\hspace{2cm}} \\ 109 - 29 = \underline{\hspace{2cm}} \\ 143 - 37 = \underline{\hspace{2cm}} \\ 131 - 32 = \underline{\hspace{2cm}} \\ 105 - 77 = \underline{\hspace{2cm}} \\ 128 - 34 = \underline{\hspace{2cm}} \end{array}$$

3


$$\begin{array}{l} 19 \times 6 = \underline{\hspace{2cm}} \\ 17 \times 8 = \underline{\hspace{2cm}} \\ 45 \times 3 = \underline{\hspace{2cm}} \\ 18 \times 6 = \underline{\hspace{2cm}} \\ 72 \times 2 = \underline{\hspace{2cm}} \\ 33 \times 4 = \underline{\hspace{2cm}} \\ 67 \times 2 = \underline{\hspace{2cm}} \\ 27 \times 5 = \underline{\hspace{2cm}} \\ 14 \times 9 = \underline{\hspace{2cm}} \\ 44 \times 3 = \underline{\hspace{2cm}} \end{array}$$

4

$$\begin{array}{l} 29 : 4 = \underline{\hspace{2cm}} \\ 19 : 2 = \underline{\hspace{2cm}} \\ 38 : 9 = \underline{\hspace{2cm}} \\ 58 : 7 = \underline{\hspace{2cm}} \\ 48 : 5 = \underline{\hspace{2cm}} \\ 19 : 3 = \underline{\hspace{2cm}} \\ 57 : 8 = \underline{\hspace{2cm}} \\ 41 : 6 = \underline{\hspace{2cm}} \\ 38 : 4 = \underline{\hspace{2cm}} \\ 15 : 2 = \underline{\hspace{2cm}} \end{array}$$

LE QUATTRO OPERAZIONI ENTRO IL 200

Metti in colonna e calcola:



1

$$\begin{array}{l} 67 : 9 = \underline{\hspace{2cm}} \\ 101 - 78 = \underline{\hspace{2cm}} \\ 15 \times 9 = \underline{\hspace{2cm}} \\ 150 - 25 = \underline{\hspace{2cm}} \\ 7 + 13 + 96 = \underline{\hspace{2cm}} \\ 28 + 10 + 109 = \underline{\hspace{2cm}} \\ 33 \times 4 = \underline{\hspace{2cm}} \\ 14 : 2 = \underline{\hspace{2cm}} \\ 137 - 6 = \underline{\hspace{2cm}} \\ 12 \times 9 = \underline{\hspace{2cm}} \end{array}$$

2

$$\begin{array}{l} 43 \times 3 = \underline{\hspace{2cm}} \\ 14 + 52 + 67 = \underline{\hspace{2cm}} \\ 25 : 3 = \underline{\hspace{2cm}} \\ 112 - 9 = \underline{\hspace{2cm}} \\ 11 : 3 = \underline{\hspace{2cm}} \\ 18 \times 6 = \underline{\hspace{2cm}} \\ 125 - 75 = \underline{\hspace{2cm}} \\ 27 + 56 + 49 = \underline{\hspace{2cm}} \\ 18 : 2 = \underline{\hspace{2cm}} \\ 135 - 23 = \underline{\hspace{2cm}} \end{array}$$

3

$$\begin{array}{l} 35 + 74 + 53 = \underline{\hspace{2cm}} \\ 187 - 129 = \underline{\hspace{2cm}} \\ 38 : 4 = \underline{\hspace{2cm}} \\ 37 \times 5 = \underline{\hspace{2cm}} \\ 115 - 38 = \underline{\hspace{2cm}} \\ 15 : 3 = \underline{\hspace{2cm}} \\ 135 + 10 + 6 = \underline{\hspace{2cm}} \\ 89 \times 2 = \underline{\hspace{2cm}} \\ 43 : 7 = \underline{\hspace{2cm}} \\ 19 + 121 + 29 = \underline{\hspace{2cm}} \end{array}$$

LE QUATTRO OPERAZIONI ENTRO IL 200




Mettili in colonna e calcola:

1	$54 + 19 + 65 =$ _____	2	$135 - 23 =$ _____	3	$39 \times 3 =$ _____	4	$18 : 2 =$ _____
	$36 + 38 + 32 =$ _____		$149 - 137 =$ _____		$45 \times 4 =$ _____		$65 : 7 =$ _____
	$65 + 13 + 48 =$ _____		$112 - 9 =$ _____		$17 \times 8 =$ _____		$15 : 3 =$ _____
	$32 + 34 + 45 =$ _____		$148 - 7 =$ _____		$29 \times 3 =$ _____		$18 : 8 =$ _____
	$65 + 20 + 58 =$ _____		$138 - 15 =$ _____		$35 \times 4 =$ _____		$15 : 2 =$ _____
	$14 + 52 + 67 =$ _____		$142 - 58 =$ _____		$43 \times 3 =$ _____		$20 : 5 =$ _____
	$28 + 10 + 109 =$ _____		$125 - 75 =$ _____		$12 \times 9 =$ _____		$22 : 3 =$ _____
	$27 + 102 + 35 =$ _____		$137 - 6 =$ _____		$25 \times 5 =$ _____		$33 : 4 =$ _____
	$5 + 40 + 102 =$ _____		$140 - 23 =$ _____		$15 \times 9 =$ _____		$26 : 6 =$ _____
	$16 + 35 + 85 =$ _____		$101 - 78 =$ _____		$27 \times 4 =$ _____		$13 : 2 =$ _____

LE QUATTRO OPERAZIONI ENTRO IL 200

Mettili in colonna e calcola:



1	$157 - 68 =$ _____	2	$24 : 3 =$ _____	3	$18 + 108 + 18 =$ _____
	$11 : 2 =$ _____		$67 \times 2 =$ _____		$109 - 29 =$ _____
	$14 : 6 =$ _____		$16 + 35 + 85 =$ _____		$26 : 6 =$ _____
	$15 \times 9 =$ _____		$24 \times 5 =$ _____		$35 \times 4 =$ _____
	$149 - 137 =$ _____		$135 - 23 =$ _____		$138 - 15 =$ _____
	$36 + 38 + 32 =$ _____		$54 + 19 + 65 =$ _____		$47 : 5 =$ _____
	$27 \times 5 =$ _____		$27 \times 4 =$ _____		$27 + 102 + 35 =$ _____
	$5 + 55 + 73 =$ _____		$25 : 4 =$ _____		$45 \times 3 =$ _____
	$20 : 9 =$ _____		$154 - 93 =$ _____		$27 : 4 =$ _____
	$141 - 84 =$ _____		$38 + 74 =$ _____		$119 + 21 + 3 =$ _____

LE QUATTRO OPERAZIONI ENTRO IL 200




Metti in colonna e calcola:

- | | | | |
|--------------------|--------------------|-----------------------|------------------|
| 1 | 2 | 3 | 4 |
| $64 + 57 =$ _____ | $150 - 25 =$ _____ | $19 \times 6 =$ _____ | $25 : 7 =$ _____ |
| $35 + 78 =$ _____ | $148 - 81 =$ _____ | $17 \times 8 =$ _____ | $15 : 2 =$ _____ |
| $15 + 116 =$ _____ | $87 - 49 =$ _____ | $45 \times 3 =$ _____ | $44 : 8 =$ _____ |
| $47 + 93 =$ _____ | $92 - 64 =$ _____ | $18 \times 6 =$ _____ | $20 : 3 =$ _____ |
| $36 + 108 =$ _____ | $146 - 87 =$ _____ | $72 \times 2 =$ _____ | $21 : 7 =$ _____ |
| $49 + 72 =$ _____ | $109 - 29 =$ _____ | $33 \times 4 =$ _____ | $54 : 9 =$ _____ |
| $14 + 125 =$ _____ | $143 - 37 =$ _____ | $67 \times 2 =$ _____ | $19 : 2 =$ _____ |
| $52 + 59 =$ _____ | $131 - 32 =$ _____ | $27 \times 5 =$ _____ | $79 : 8 =$ _____ |
| $29 + 120 =$ _____ | $105 - 77 =$ _____ | $14 \times 9 =$ _____ | $34 : 4 =$ _____ |
| $3 + 137 =$ _____ | $128 - 34 =$ _____ | $44 \times 3 =$ _____ | $58 : 6 =$ _____ |

LE QUATTRO OPERAZIONI ENTRO IL 200

Metti in colonna e calcola:



- | | | |
|------------------------|------------------------|------------------------|
| 1 | 2 | 3 |
| $32 + 34 + 45 =$ _____ | $123 + 16 =$ _____ | $44 \times 3 =$ _____ |
| $142 - 58 =$ _____ | $21 : 8 =$ _____ | $36 + 38 + 32 =$ _____ |
| $25 \times 5 =$ _____ | $123 - 35 =$ _____ | $132 - 27 =$ _____ |
| $12 : 5 =$ _____ | $72 \times 2 =$ _____ | $45 : 7 =$ _____ |
| $19 \times 6 =$ _____ | $14 : 4 =$ _____ | $26 : 4 =$ _____ |
| $84 + 45 =$ _____ | $29 \times 3 =$ _____ | $28 \times 4 =$ _____ |
| $149 - 137 =$ _____ | $148 - 7 =$ _____ | $112 - 9 =$ _____ |
| $23 : 7 =$ _____ | $65 + 20 + 58 =$ _____ | $65 + 13 + 48 =$ _____ |
| $140 - 23 =$ _____ | $39 : 4 =$ _____ | $14 \times 9 =$ _____ |
| $5 + 40 + 102 =$ _____ | $17 \times 8 =$ _____ | $54 + 19 + 65 =$ _____ |