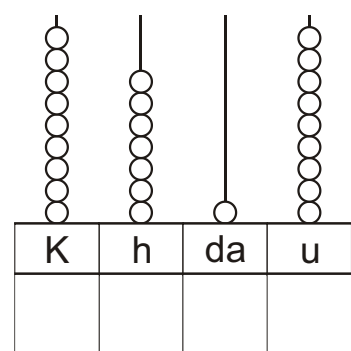
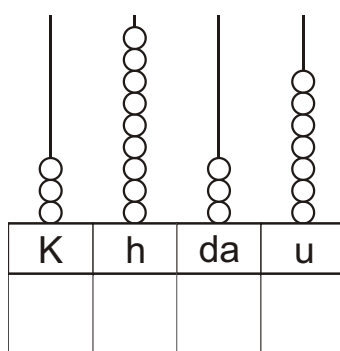
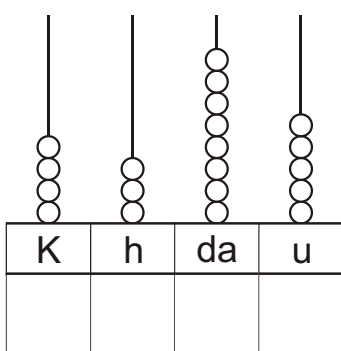
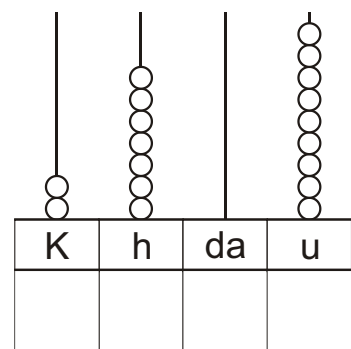
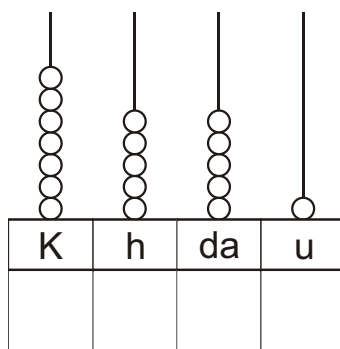
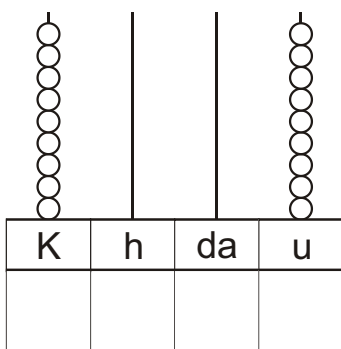
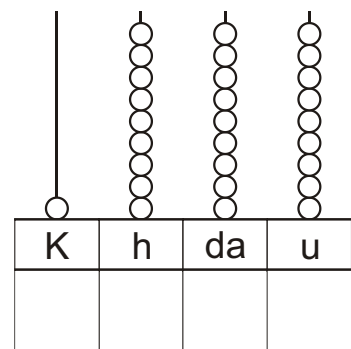
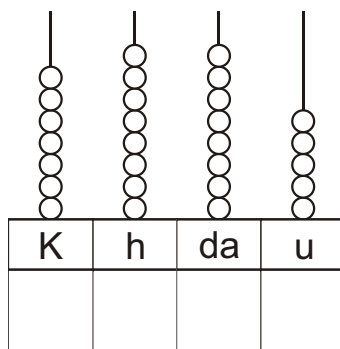
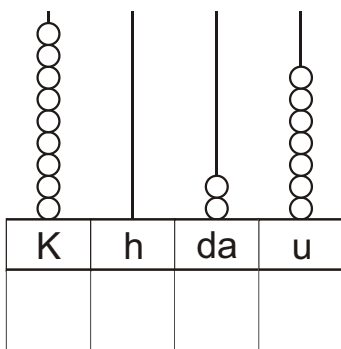
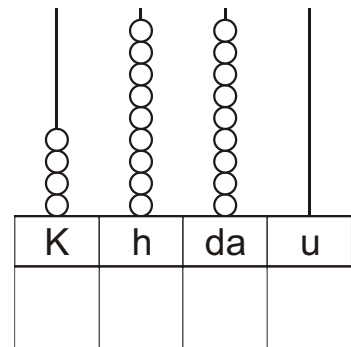
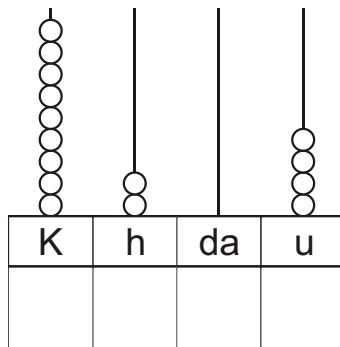
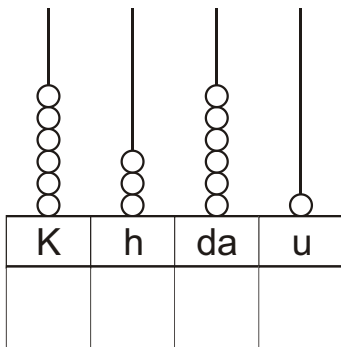


IL VALORE DELLE CIFRE

Completa scrivendo i numeri in cifra registrati con l'abaco:



IL VALORE DELLE CIFRE

Rappresenta con le palline sull'abaco i numeri scritti in cifra:

K	h	da	u
5	6	9	0

K	h	da	u
2	7	1	5

K	h	da	u
3	0	0	3

K	h	da	u
9	8	0	0

K	h	da	u
1	5	2	2

K	h	da	u
7	0	1	1

K	h	da	u
8	1	5	0

K	h	da	u
4	2	3	5

K	h	da	u
6	5	0	2