

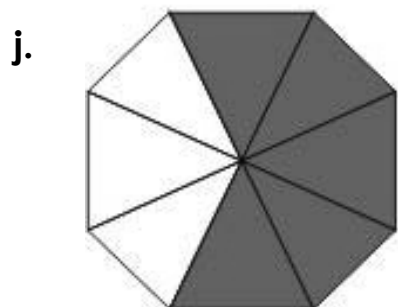

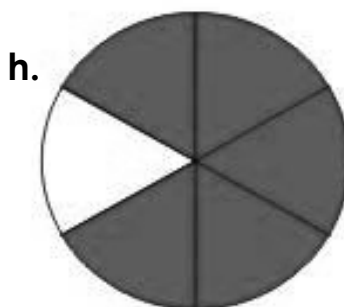

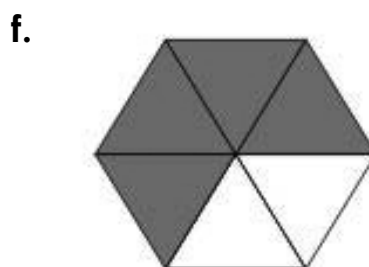


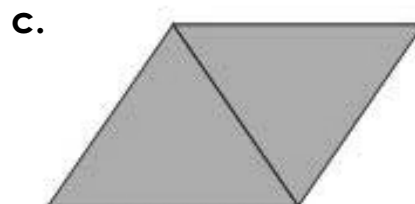
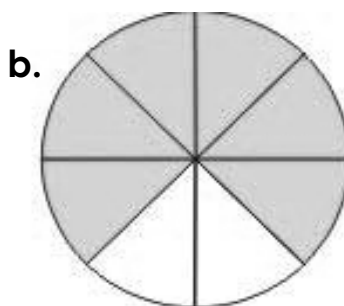



1 DAL DISEGNO ALLA FRAZIONE

Scrivi la frazione che corrisponde ad ogni figura. Ricordati di guardare in quante parti è stata divisa ogni forma e quante parti sono state colorate.



1

DAL DISEGNO ALLA FRAZIONE: soluzioni

Scrivi la frazione che corrisponde ad ogni figura. Ricordati di guardare in quante parti è stata divisa ogni forma e quante parti sono state colorate.

a. $\frac{2}{4}$

b. $\frac{6}{8}$

c. $\frac{2}{2}$

d. $\frac{2}{4}$

e. $\frac{4}{6}$

f. $\frac{4}{6}$

g. $\frac{5}{9}$

h. $\frac{5}{6}$

i. $\frac{1}{2}$

j. $\frac{5}{8}$

k. $\frac{3}{5}$

l. $\frac{2}{4}$