

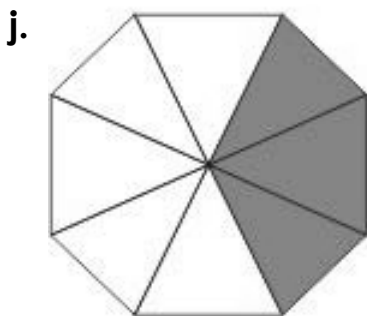

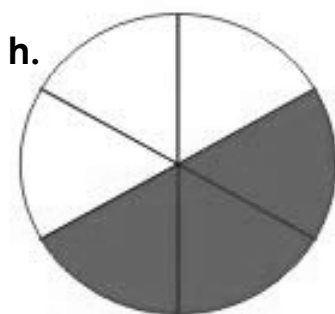
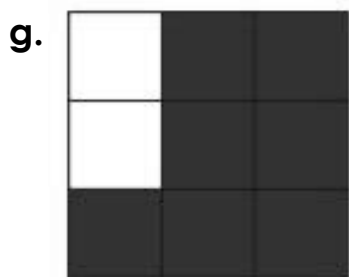
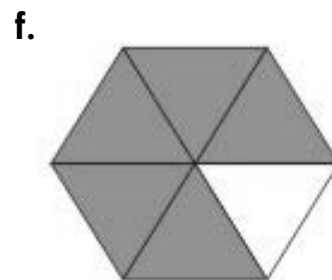


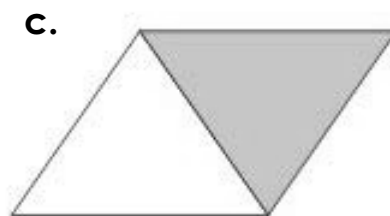
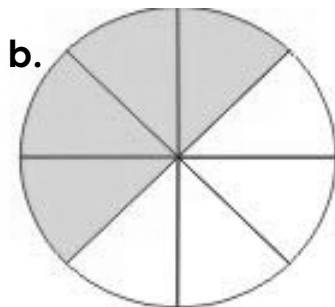



# 2 DAL DISEGNO ALLA FRAZIONE

Scrivi la frazione che corrisponde ad ogni figura. Ricordati di guardare in quante parti è stata divisa ogni forma e quante parti sono state colorate.



# 2

## DAL DISEGNO ALLA FRAZIONE: soluzioni

Scrivi la frazione che corrisponde ad ogni figura. Ricordati di guardare in quante parti è stata divisa ogni forma e quante parti sono state colorate.

a.  $\frac{3}{4}$

b.  $\frac{4}{8}$

c.  $\frac{1}{2}$

d.  $\frac{2}{4}$

e.  $\frac{3}{6}$

f.  $\frac{5}{6}$

g.  $\frac{7}{9}$

h.  $\frac{3}{6}$

i.  $\frac{2}{2}$

j.  $\frac{3}{8}$

k.  $\frac{3}{5}$

l.  $\frac{3}{4}$