

# FRAZIONI DECIMALI

Questa è l'unità, cioè l'intero



È stata divisa in 10 parti uguali



Ogni parte è  $\frac{1}{10}$  un decimo

**Colora:**

Ho colorato .....



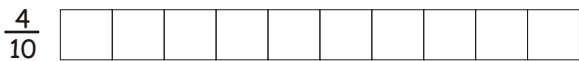
Ho colorato .....



Ho colorato .....



Ho colorato .....




Ho colorato .....




Ho colorato .....



Ho colorato .....



Ho colorato .....




Ho colorato .....




Ho colorato .....



Questa è l'unità, cioè l'intero




È stata divisa in 100 parti uguali




Ogni parte è  $\frac{1}{100}$  un centesimo


**Colora:**




$\frac{5}{100}$




$\frac{10}{100}$




$\frac{20}{100}$




$\frac{25}{100}$




$\frac{40}{100}$



$\frac{50}{100}$



$\frac{75}{100}$



$\frac{100}{100}$