

GIOCHIAMO
CON LE CARTE DELLE
FRAZIONI

1) MEMORY

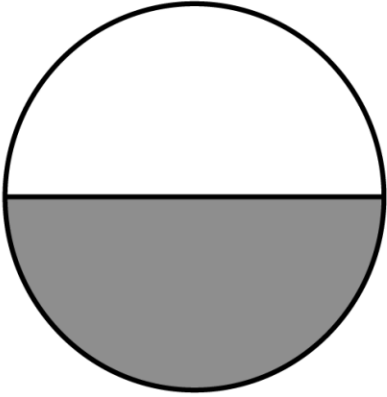
(OGNI CARTA È DOPPIA
USARE 2 GRUPPI DI CARTE)

2) FRAZIONI EQUIVALENTI

(USANDO UN SOLO GRUPPO DI CARTE)

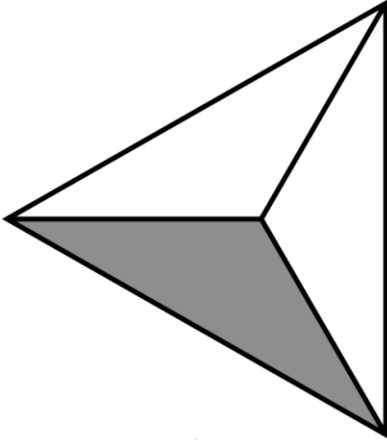


$$\frac{1}{2}$$



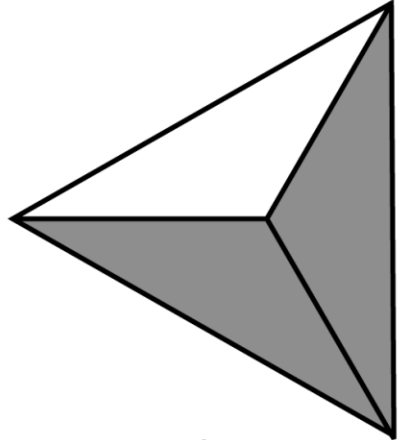
$$\frac{2}{2}$$

$$\frac{1}{3}$$




$$\frac{1}{3}$$

$$\frac{2}{3}$$




$$\frac{2}{3}$$

$$\frac{1}{4}$$



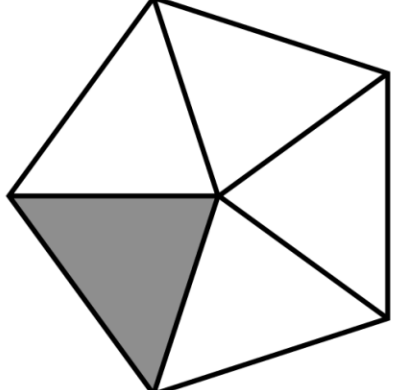
$$\frac{1}{4}$$

$$\frac{3}{4}$$



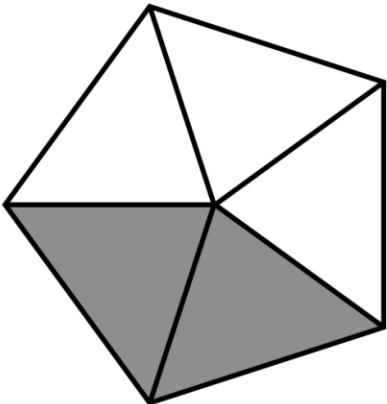
$$\frac{3}{4}$$

$$\frac{1}{5}$$



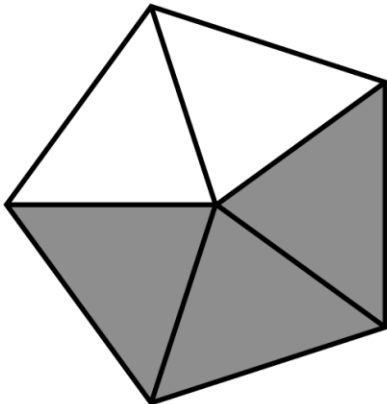
$$\frac{1}{5}$$

$$\frac{2}{5}$$



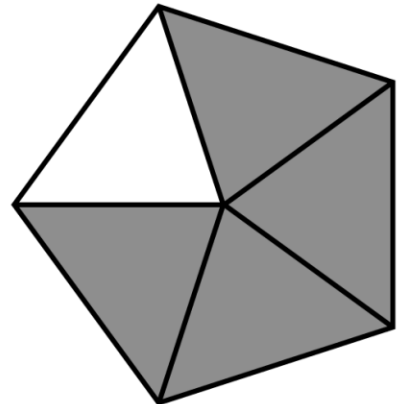
$$\frac{2}{5}$$

$$\frac{3}{5}$$



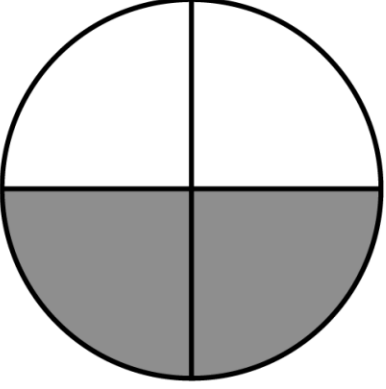
$$\frac{3}{5}$$

$$\frac{4}{5}$$



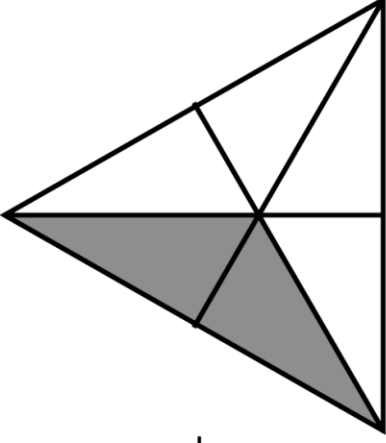
$$\frac{4}{5}$$

$$\frac{2}{4}$$



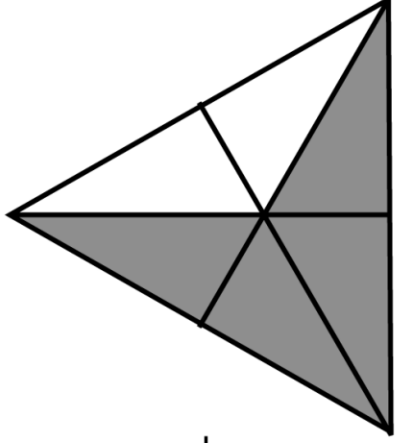
$$\frac{2}{4}$$

$$\frac{2}{6}$$



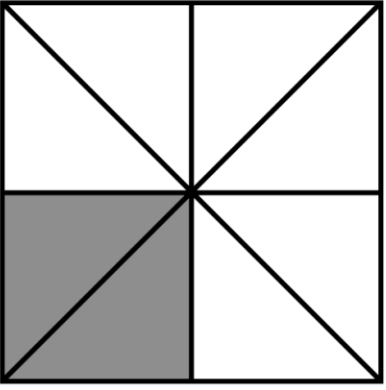
$$\frac{2}{6}$$

$$\frac{4}{6}$$



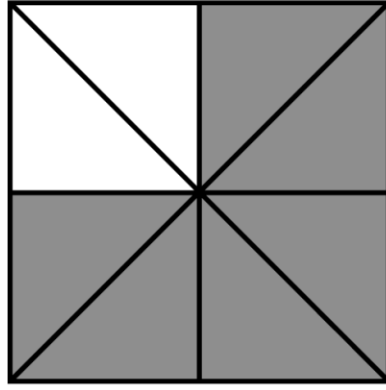
$$\frac{4}{6}$$

$$\frac{2}{8}$$



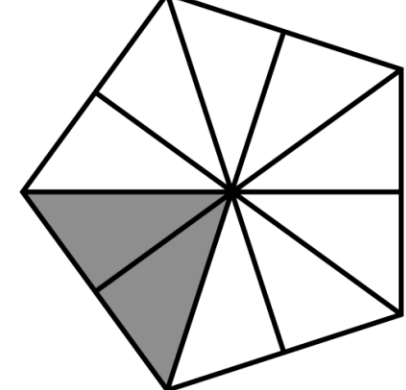
$$\frac{2}{8}$$

$$\frac{8}{9}$$



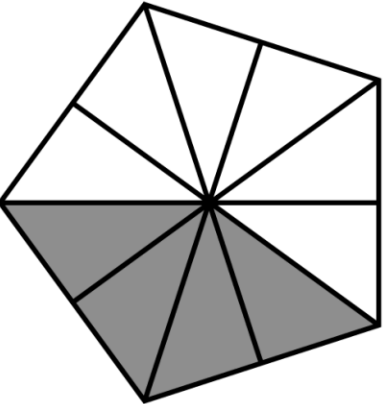
$$\frac{8}{9}$$

$$\frac{4}{10}$$



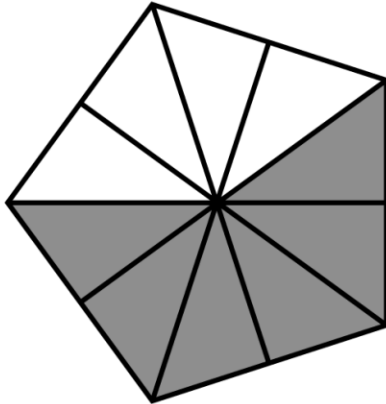
$$\frac{4}{10}$$

$$\frac{4}{10}$$



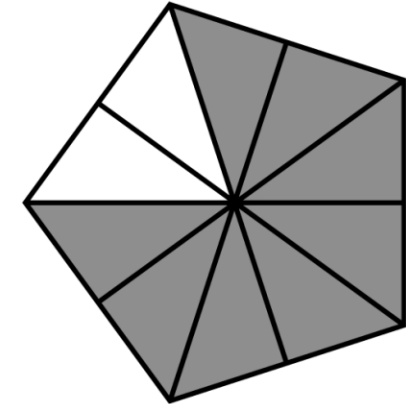
$$\frac{4}{10}$$

$$\frac{6}{10}$$




$$\frac{6}{10}$$

$$\frac{8}{10}$$




$$\frac{8}{10}$$

$$\frac{1}{7}$$



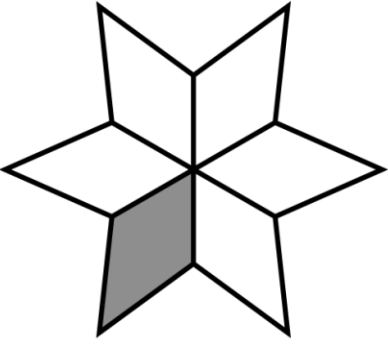
$$\frac{1}{7}$$

$$\frac{5}{6}$$




$$\frac{5}{6}$$

$$\frac{1}{6}$$




$$\frac{1}{6}$$

$$\frac{4}{7}$$




$$\frac{4}{7}$$

$$\frac{3}{7}$$




$$\frac{3}{7}$$

$$\frac{2}{7}$$




$$\frac{2}{7}$$

$$\frac{2}{2}$$



$$\frac{2}{2}$$

$$\frac{4}{9}$$



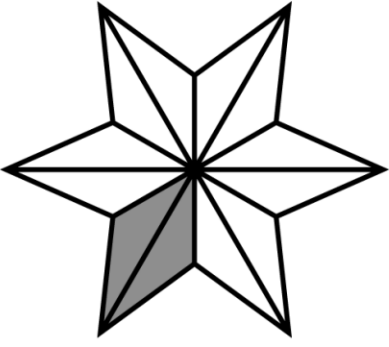
$$\frac{6}{7}$$

$$\frac{4}{5}$$




$$\frac{5}{7}$$

$$\frac{2}{12}$$



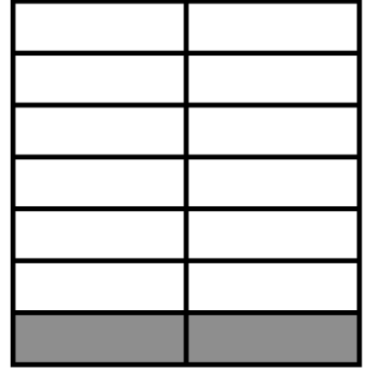
$$\frac{2}{12}$$

$$\frac{10}{12}$$



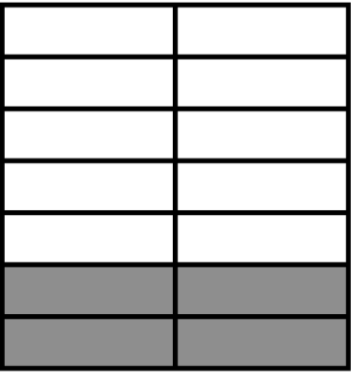
$$\frac{10}{12}$$

$$\frac{2}{14}$$



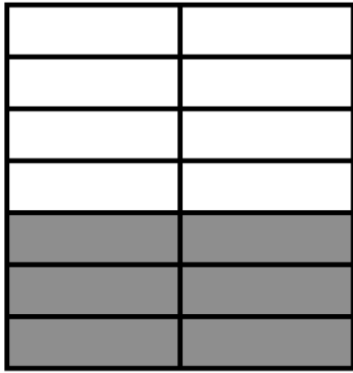
$$\frac{2}{14}$$

$$\frac{4}{14}$$




$$\frac{4}{14}$$

$$\frac{6}{14}$$



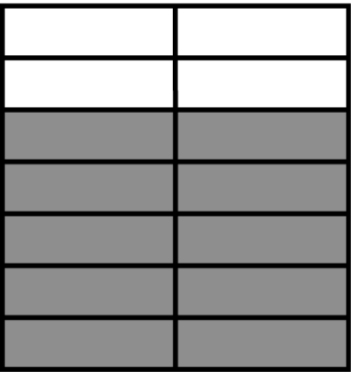
$$\frac{6}{14}$$

$$\frac{8}{14}$$



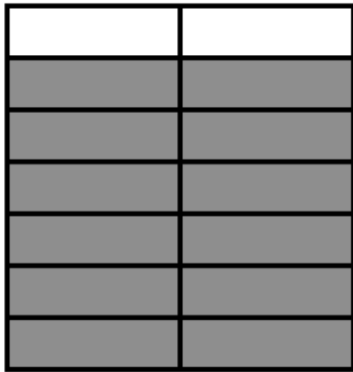
$$\frac{8}{14}$$

$$\frac{10}{14}$$




$$\frac{10}{14}$$

$$\frac{12}{14}$$



$$\frac{12}{14}$$

$$\frac{5}{5}$$



$$\frac{5}{5}$$