


Stima le lunghezze



Stima la lunghezza di ogni pesce, poi prendi un righello e misurali.


1.



Stima: _____ cm

Misura: _____ cm

2.



Stima: _____ cm

Misura: _____ cm


3.



Stima: _____ cm

Misura: _____ cm

4.



Stima: _____ cm

Misura: _____ cm

5.



Stima: _____ cm

Misura: _____ cm