

Scrivi il numero in cifre

h 3 da 5 = _____

da 5 c 8 = _____

h 5 u 4 d 7 = _____

c 8 m 8 = _____

da 5 u 5 c 5 = _____

h 6 da 1 = _____

uk 9 da 6 = _____

m 8 = _____

u 7 d 7 m 4 = _____

u 5 c 7 = _____

c 9 m 7 = _____

u 8 d 2 = _____

d 7 = _____

c 7 m 8 = _____

u 8 c 9 = _____

d 5 m 4 = _____

da 1 d 8 m 3 = _____

u 6 = _____

u 1 m 9 = _____

u 8 d 3 m 7 = _____

c 3 m 9 = _____

d 3 c 9 m 4 = _____

h 2 u 4 d 8 = _____

u 1 d 4 = _____

u 8 c 6 = _____

uk 5 h 9 = _____

u 2 c 4 = _____

u 2 d 5 m 4 = _____

da 7 u 5 c 7 = _____

da 9 u 5 c 2 = _____


u 4 d 8 c 6 = _____

da 5 = _____

d 2 = _____

da 8 = _____

da 7 c 6 = _____



d 5 m 1 = _____

u 1 d 8 = _____

u 2 = _____

da 1 d 4 m 5 = _____

da 2 = _____

u 9 d 4 c 8 = _____

da 4 d 1 m 8 = _____

c 7 = _____

da 3 u 3 d 3 = _____

uk 8 h 9 = _____

u 5 d 6 m 1 = _____

da 5 u 3 d 8 = _____

h 3 u 5 = _____

da 4 d 2 = _____

da 2 d 6 m 2 = _____

da 8 d 6 c 9 = _____

u 2 d 8 = _____

u 5 d 5 c 7 = _____

da 5 c 3 = _____

da 3 d 8 c 5 = _____

d 3 c 4 = _____

u 6 m 6 = _____

uk 6 da 3 = _____

c 9 m 4 = _____

d 4 = _____

Scrivi il numero in cifre

uk 8 h 1 = _____

h 5 da 5 = _____

c 8 m 4 = _____

u 5 d 9 c 4 = _____

da 6 = _____

da 4 d 8 c 5 = _____

c 8 = _____

da 4 u 7 d 2 = _____

uk 4 da 2 = _____

h 1 = _____

u 6 d 1 = _____

u 9 d 3 = _____

h 8 u 4 = _____

u 9 c 7 = _____

u 7 d 5 c 2 = _____

m 1 = _____

uk 1 = _____

m 1 = _____

h 3 u 1 = _____

uk 8 h 7 = _____

u 8 d 2 c 5 = _____

da 1 u 1 c 7 = _____

m 5 = _____

uk 5 h 4 = _____

h 5 = _____

d 1 c 4 m 7 = _____

d 2 c 5 m 1 = _____

u 7 d 4 c 1 = _____

c 6 m 2 = _____

h 1 = _____


h 9 u 9 = _____

da 1 d 8 = _____

uk 4 = _____

h 2 da 6 = _____

h 7 u 3 d 6 = _____



u 9 = _____

da 6 c 3 = _____

d 7 c 8 = _____

c 3 m 8 = _____

d 2 = _____

da 1 d 2 m 1 = _____

d 2 m 6 = _____

u 2 c 8 = _____

m 2 = _____

u 1 c 1 = _____

h 1 = _____

uk 8 = _____

u 2 c 3 = _____

uk 2 da 3 = _____

d 4 c 9 m 6 = _____

h 3 da 9 = _____

h 9 = _____

uk 9 h 7 = _____

u 1 = _____

c 1 m 9 = _____

c 7 = _____

u 3 d 1 = _____

c 6 m 9 = _____

u 3 d 7 c 6 = _____

da 8 c 7 = _____


Componi l'unità:

- | | |
|--------------------------------|--------------------------------|
| $0,15 + \underline{\quad} = 1$ | $0,22 + \underline{\quad} = 1$ |
| $0,23 + \underline{\quad} = 1$ | $0,21 + \underline{\quad} = 1$ |
| $0,18 + \underline{\quad} = 1$ | $0,71 + \underline{\quad} = 1$ |
| $0,2 + \underline{\quad} = 1$ | $0,2 + \underline{\quad} = 1$ |
| $0,76 + \underline{\quad} = 1$ | $0,55 + \underline{\quad} = 1$ |
| $0,16 + \underline{\quad} = 1$ | $0,11 + \underline{\quad} = 1$ |
| $0,9 + \underline{\quad} = 1$ | $0,77 + \underline{\quad} = 1$ |
| $0,82 + \underline{\quad} = 1$ | $0,36 + \underline{\quad} = 1$ |
| $0,64 + \underline{\quad} = 1$ | $0,3 + \underline{\quad} = 1$ |
| $0,23 + \underline{\quad} = 1$ | $0,4 + \underline{\quad} = 1$ |
| $0,95 + \underline{\quad} = 1$ | $0,28 + \underline{\quad} = 1$ |
| $0,76 + \underline{\quad} = 1$ | $0,65 + \underline{\quad} = 1$ |
| $0,89 + \underline{\quad} = 1$ | $0,65 + \underline{\quad} = 1$ |
| $0,41 + \underline{\quad} = 1$ | $0,72 + \underline{\quad} = 1$ |
| $0,93 + \underline{\quad} = 1$ | $0,97 + \underline{\quad} = 1$ |
| $0,27 + \underline{\quad} = 1$ | $0,85 + \underline{\quad} = 1$ |
| $0,69 + \underline{\quad} = 1$ | $0,54 + \underline{\quad} = 1$ |
| $0,34 + \underline{\quad} = 1$ | $0,61 + \underline{\quad} = 1$ |
| $0,74 + \underline{\quad} = 1$ | $0,64 + \underline{\quad} = 1$ |
| $0,52 + \underline{\quad} = 1$ | $0,87 + \underline{\quad} = 1$ |
| $0,81 + \underline{\quad} = 1$ | $0,2 + \underline{\quad} = 1$ |
| $0,88 + \underline{\quad} = 1$ | $0,98 + \underline{\quad} = 1$ |
| $0,13 + \underline{\quad} = 1$ | $0,55 + \underline{\quad} = 1$ |
| $0,18 + \underline{\quad} = 1$ | $0,26 + \underline{\quad} = 1$ |
| $0,08 + \underline{\quad} = 1$ | $0,58 + \underline{\quad} = 1$ |



Componi l'unità:

- | | |
|--------------------------------|--------------------------------|
| $0,6 + \underline{\quad} = 1$ | $0,65 + \underline{\quad} = 1$ |
| $0,14 + \underline{\quad} = 1$ | $0,01 + \underline{\quad} = 1$ |
| $0,83 + \underline{\quad} = 1$ | $0,71 + \underline{\quad} = 1$ |
| $0,92 + \underline{\quad} = 1$ | $0,95 + \underline{\quad} = 1$ |
| $0,27 + \underline{\quad} = 1$ | $0,8 + \underline{\quad} = 1$ |
| $0,68 + \underline{\quad} = 1$ | $0,81 + \underline{\quad} = 1$ |
| $0,56 + \underline{\quad} = 1$ | $0,56 + \underline{\quad} = 1$ |
| $0,84 + \underline{\quad} = 1$ | $0,32 + \underline{\quad} = 1$ |
| $0,35 + \underline{\quad} = 1$ | $0,55 + \underline{\quad} = 1$ |
| $0,97 + \underline{\quad} = 1$ | $0,82 + \underline{\quad} = 1$ |
| $0,35 + \underline{\quad} = 1$ | $0,28 + \underline{\quad} = 1$ |
| $0,9 + \underline{\quad} = 1$ | $0,94 + \underline{\quad} = 1$ |
| $0,52 + \underline{\quad} = 1$ | $0,37 + \underline{\quad} = 1$ |
| $0,08 + \underline{\quad} = 1$ | $0,37 + \underline{\quad} = 1$ |
| $0,66 + \underline{\quad} = 1$ | $0,99 + \underline{\quad} = 1$ |
| $0,26 + \underline{\quad} = 1$ | $0,88 + \underline{\quad} = 1$ |
| $0,15 + \underline{\quad} = 1$ | $0,62 + \underline{\quad} = 1$ |
| $0,37 + \underline{\quad} = 1$ | $0,8 + \underline{\quad} = 1$ |
| $0,92 + \underline{\quad} = 1$ | $0,95 + \underline{\quad} = 1$ |
| $0,65 + \underline{\quad} = 1$ | $0,45 + \underline{\quad} = 1$ |
| $0,81 + \underline{\quad} = 1$ | $0,09 + \underline{\quad} = 1$ |
| $0,05 + \underline{\quad} = 1$ | $0,03 + \underline{\quad} = 1$ |
| $0,01 + \underline{\quad} = 1$ | $0,05 + \underline{\quad} = 1$ |
| $0,87 + \underline{\quad} = 1$ | $0,69 + \underline{\quad} = 1$ |
| $0,8 + \underline{\quad} = 1$ | $0,42 + \underline{\quad} = 1$ |



Ordina i numeri dal minore al maggiore



0,002 5 2,11 0,002 4

0,008 1 6 6,346 0,261

5,57 0,7 5,155 3,2 0,248

0,04 0,85 0,5 0,29 8,5

0,002 0,058 7,53 0,061 2,2

2 2 0,041 0,4 0,236

0,994 5 4 0,526 0,2

0,004 0,06 0,02 0,06 0,874

3,949 0,002 0,6 0,1 2

4 4,494 5,263 0,035 3,725

9,1 0,09 0,1 3,48 0,07

0,06 0,71 0,006 0,88 9,136

3 5,89 0,006 0,67 0,018

8,1 0,5 0,009 3 0,096

0,09 0,23 0,69 5,992 1

0,27 3,98 0,059 6,08 3

0,441 6 0,01 0,5 6,03

0,79 0,061 8,827 8,687 9,026

2 0,4 0,9 0,02 3,76

0,54 0,666 0,06 0,46 0,009

7 0,6 0,054 0,009 0,077

2,56 0,02 0,562 0,44 2

9 8,413 0,39 5,4 0,867
