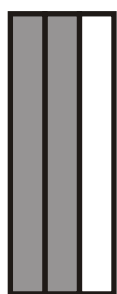


I TERMINI DELLA FRAZIONE



$$\frac{2}{3}$$



NUMERATORE (indica quante parti dell'intero sono state colorate)







LINEA DI FRAZIONE (:)

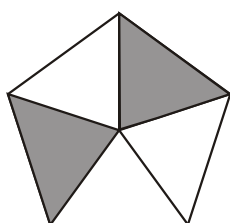


DENOMINATORE (indica in quante parti uguali è stato diviso l'intero)

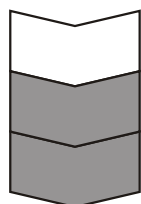
Completa la tabella

	FRAZIONE	NUMERATORE	DENOMINATORE
			
			
			
			

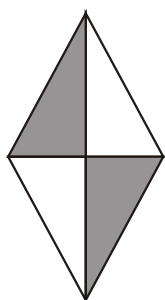
Quante sono le parti colorate? Completa con il **numeratore**:



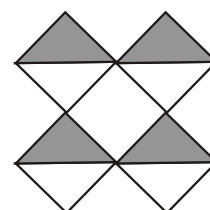
$$\frac{\dots}{5}$$



$$\frac{\dots}{3}$$

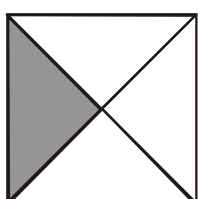


$$\frac{\dots}{4}$$

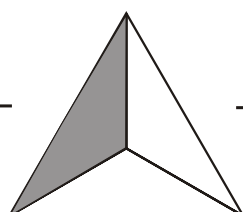


$$\frac{\dots}{8}$$

In quante parti uguali è stato diviso l'intero? Completa con il **denominatore**:




$$\frac{1}{\dots}$$



$$\frac{1}{\dots}$$



$$\frac{5}{\dots}$$



$$\frac{4}{\dots}$$