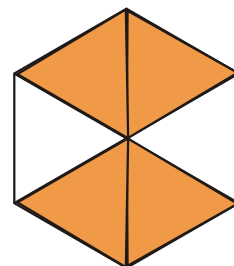
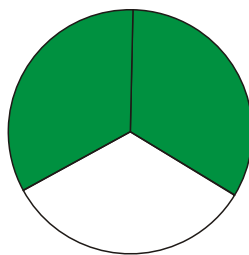

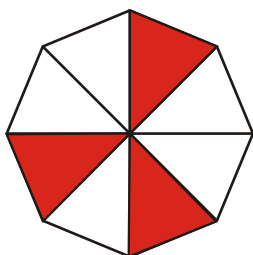


FRAZIONI

Scrivi sotto ogni frazione la lettera della figura corrispondente:

HA LE GAMBE,
MA NON CAMMINA,
QUANDO LAVORA
FA RIPOSARE,
CHE COS'È?

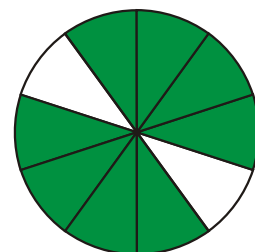

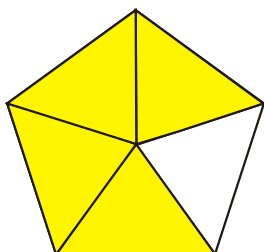


D

A

I

S



A

L

E

$$\frac{1}{2}$$

.....

$$\frac{3}{4}$$

.....

$$\frac{4}{6}$$

.....

$$\frac{8}{10}$$

.....

$$\frac{3}{8}$$

.....

$$\frac{2}{3}$$

.....

$$\frac{4}{5}$$

.....



è